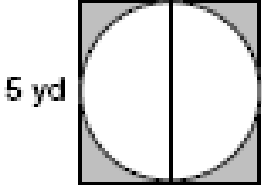
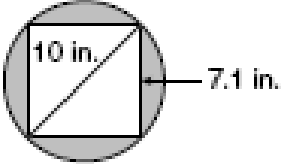
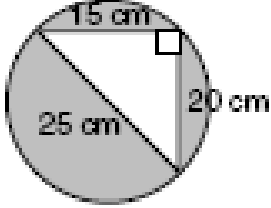
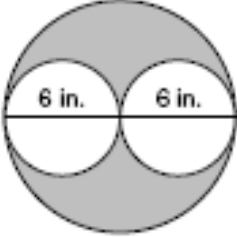
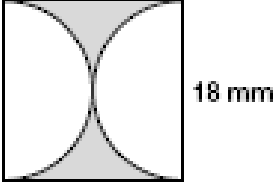
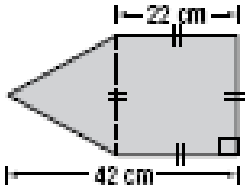
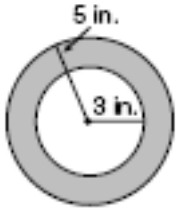



# Homework Finding the Area of Irregular Figures (Unit 9 - Math 7 PLUS)

Name \_\_\_\_\_

- Find the area of each shaded region or of the complex figure. Round your answers to the nearest tenth if necessary.
- Show work!!

<p>1.</p>  <p style="margin-left: 20px;">5 yd</p>	<p>2.</p>  <p style="margin-left: 20px;">10 in.      7.1 in.</p>
<p>3.</p>  <p style="margin-left: 20px;">15 cm 25 cm      20 cm</p>	<p>4.</p>  <p style="margin-left: 20px;">6 in.      6 in.</p>
<p>5.</p>  <p style="margin-left: 20px;">18 mm</p>	<p>6.</p>  <p style="margin-left: 20px;">22 cm 42 cm</p>
<p>7.</p>  <p style="margin-left: 20px;">5 in. 3 in.</p>	<p>8.</p>  <p style="margin-left: 20px;">34 ft 15 ft</p>